



Fr. Agnel School

Waliv, Vasai (E)

First Semester Exam

Sub: Maths

Total Marks : 30

Std. :1st

Date:22-10-2021

Q.I. Multiple choice questions

8

1. Arrange the numbers in increasing order 3,1,4,2

- a. 1,2,3,4 b. 1,3,2,4
c. 4,3,2,1 d. 4,1,2,3

2. Add $4 + 0 =$

- a. 0 b. 4 c. 3 d. 1

3. $1 +$ $= 9$

- a. 8 b. 7 c. 6 d. 4

4. Subtract $2 - 2 =$

- a. 4 b. 3 c. -0 d. 2

5. Subtract $9 - 3 =$

- a. 2 b. 4 c. 6 d. 8

6. What is the value of ₹5 note?

- a. 50paise b. 1Rupee c. 2Rupee d. 5Rupee

7. _____ sign we use of Rupees

- a. \$ b. ₹ c. £ d. €

8. From the objects which is less? _____



- a. Flower b. butterflies c. eggs d. chocolates

Q.II.1. Colour the box having less balloons.

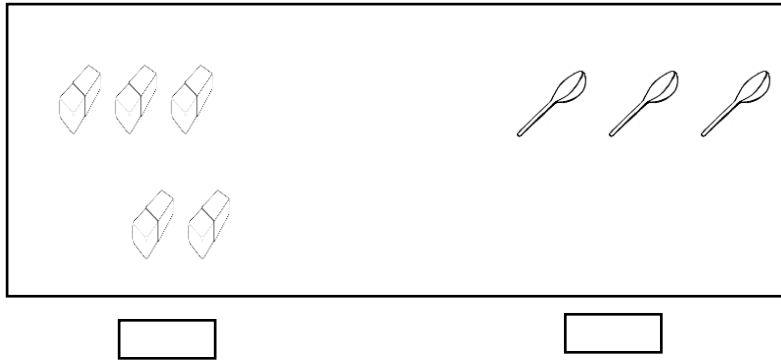
1



2. Make one to one pair and write which is more and which is less.

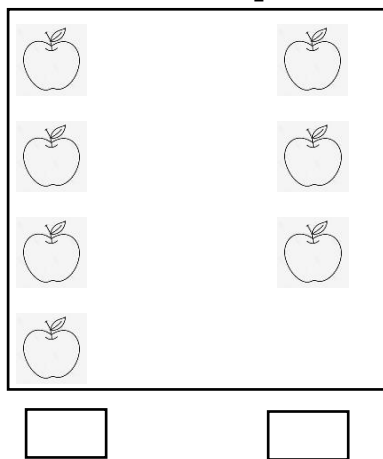
Put 'M' for more and 'L' for less.

1



3. Make one - to -one pair and colour the box that has less.

1



Q.III.1. Write the given numbers in Increasing order.

1

i. (7) (6) (9) (8)

Ans:

2. Write the given numbers in Descending order.

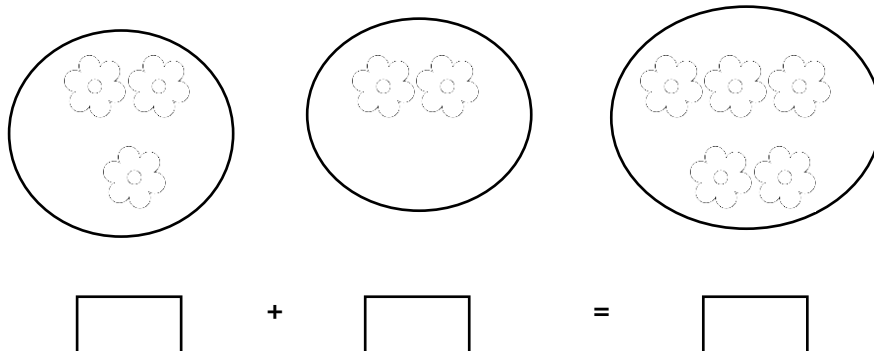
1

i. (3) (2) (5) (4)

Ans:

Q.IV. 1. Look at the picture and add the following.

1



2. Add, Write the number and draw proper pictures.

1



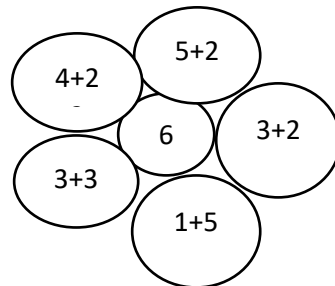
$$\boxed{4} + \boxed{} = \boxed{}$$

3. Radha has 4 pencils. Rita gave her two more pencils. How many pencils does Radha have in all?

2




$$\begin{array}{r} \boxed{} \text{ Radha's pencils} \\ + \boxed{} \text{ Rita gave} \\ \hline \boxed{} \text{ Total pencils} \end{array}$$

4. Colour the petal whose answer is equal to the number in the circle. 1



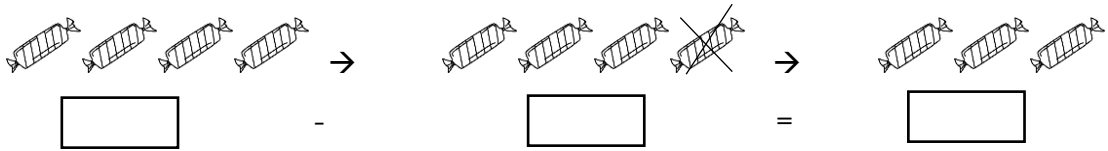
5. Add the numbers given on a butterfly and join it with the correct flower.

1




Q.VI.1. Observe the pictures and fill in the boxes.

1



2. Count the number of objects and subtract.

1



3. Write the correct number in the boxes.

1

a.

7
- 3

b.

3
- 3

4. There are 4 books on a table. 2 books fell down. How many books

Are left on the table now.

2

[]	Books on a table	
-	[]	Books fell down
	[]	Books left

Q.VI. 1. Match the following.

2

- | | |
|----------------|----------------|
| 1. One rupee | a. Two rupees |
| 2. Five rupees | b. Ten rupees |
| 3. Two rupees | c. One rupee |
| 4. Ten rupees | d. Five rupees |

2. Which notes or coins will you pay to buy given articles.

1

Article	Price	Coins / Notes
	2 rupees	

3. Read and write the answers.

1



i. The price of a pencil is Rs2 and the price of an eraser is rupee 1.

Find the total price?

Ans:

4. Find the price of the articles by counting coins.

1

Article	Coins	Price
		

5. Complete the following tables.

1

i. $5 \times 7 =$

ii. $2 \times 8 =$
