



Fr. Agnel School

Waliv, Vasai (E)

First Semester Exam

Std: 2nd

Sub Maths

Total Marks :30

Date: 20-10-2021

Q.1. Multiple choice questions.

(8)

1. You have two cupcakes, mom gave you two more cupcakes. Now how many cupcakes do you have?

a. 4 b. 2 c. 6 d. 8

2. $3+0=$

a. 2 b. 3 c. 4 d. 5

3. $8+=14$

a. 4 b. 5 c. 6 d. 7

4. 6Units +2Units = Units.

a. 8 b. 7 c. 4 d. 2

5. $15-10=$

a. 12 b. 05 c. 14 d. 18

6. Which month comes after September?

a. August b. October c. November d. January

7. Which is the first month of the Indian calendar?

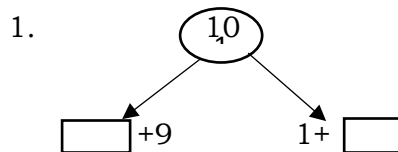
a. Magh b. Bhadra c. Chaitra d. Ashwin

8. Put the (<,>) symbol ; 3 7

a. < b. > c. % d. =

Q.II.1. Fill the correct numbers in the boxes

(1)



2. Match the following. (1)

1. 3 plus 2 a. 9+7

2. 9 add 7 b. 1+2

c. 3+2

3. Add the following. (1)

1. $5+6=$

2. $3+0=$

Q.III.1. Add by counting forward.

(2)

a. Anand has 27 stickers. He bought 5 more. How many stickers does Anand have now?

What is given? _____

What is asked? _____

What to do? _____

T	U
+	

2. Add by counting forward. (Vertical)

(1)

4	1
+	9

3. Add by counting forward. (Horizontal)

(1)

1. $67+3=$

Q.IV.1. Addition of single digit numbers.

(1)

5+4
Units

2. Addition of two digit numbers.

(2)

<input type="text"/>	Tens	<input type="text"/>	Units
<input type="text"/>	Tens	<input type="text"/>	Units
<input type="text"/>	Tens	<input type="text"/>	Units

3. Carry out the following addition.


(1)

T	U
1	6
+2	3

Q.V.1. Subtraction by paring.

(1)

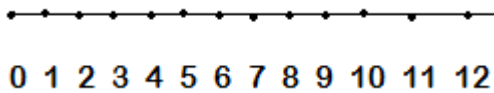
- a. There are 8 paper lanterns and 4 lamps. How many more lanterns are there than the lamps?



$$\begin{array}{r} 8 \\ - 4 \\ \hline \square \end{array}$$

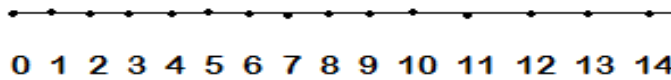
There are more lanterns than the lamps.

- 2. Subtract the following by counting backwards on the number line. (1)**



$$12 - 5 = \square$$

- 3. Subtract the following by counting forward on the number line. (1)**



$$12 - 7 = \square$$

- 4. Carry the following subtraction. (1)**

1. $43 - 2 =$

2. $44 - 40 =$

- Q.VI. 1. Fill in the blanks. (1)**

a. October has _____ days.

b. _____ month comes after August.

- 2. Answer the following. (2)**

a. How many days does February have?

Ans:

b. Which month comes before June?

Ans:

- 3. Answer the following. (2)**

1. Which is the first month in the Indian Calendar?

Ans:

2. Which is the seventh month in the Indian Calendar?

Ans:

Q.VII. 1. Circle the smaller number.

(1/2)

1 , 9

2. Circle the bigger number.

(1/2)

8 , 9

3. Fill in the blanks with proper sign < or > between two numbers

Given below.

(1)

1. 84 , 86

84 86

2. 68 , 59

68 59
