

# Fr. Agnel School

Waliv, Vasai (E)

First Unit Test

Std. : 1<sup>st</sup>

Sub : Maths

Total Marks : 20

Name: \_\_\_\_\_ Roll No: \_\_\_\_\_

## Q.I. Multiple choice questions.

(8)

1. The correct number name for given number '6' is. \_\_\_\_\_

- a. Four    b. Six    c. Two    d. Nine

2. Count the flowers.



and choose the

Correct number. \_\_\_\_\_

- a. 4    b. 5    c. 3    d. 0

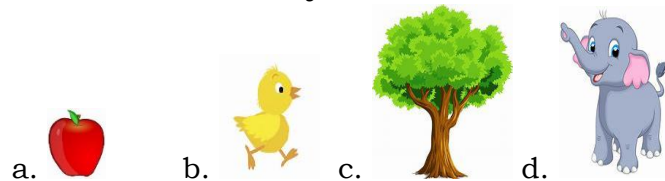
3. Find the number words of 28. \_\_\_\_\_

- a. Twenty one    b. Twenty three    c. Twenty eight    d. Twenty six

4. How many colours does  rainbow have. \_\_\_\_\_

- a. 5    b. 7    c. 6    d. 3

5. Tick the smallest object.



6. What is  $3 \times 7 =$  \_\_\_\_\_

- a. 21    b. 23    c. 25    d. 27

7. Tick the object which is above the table.



8. How many eyes  does a girl have? \_\_\_\_\_

- a. One    b. Three    c. Four    d. Two

**Q.II.A Match the following.**

**(1)**

1) 7




2) 4



**B. Draw one  Ball and colour it.**

**(1)**



**Q.III.A. Circle (O) the object which is above the table.**


**(1)**

1.



**B. Fill in the boxes for (✓) behind and (X) for in front.**

**(1)**



**C. Draw a circle (O) around the picture showing many flowers.**

**(1)**



**Q.IV. A. Write (O) for one object and (M) for many in the box**

**(1)**



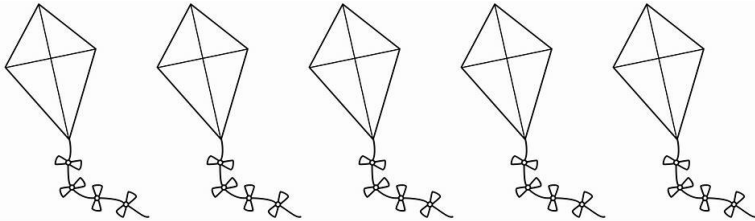
**B. Write 'B' for Big object and 'S' for Small object.**

**(1)**



**C. Colour three kites.**

**(1)**



**D. Draw four**




**(1)**

**Q.V. A. Place a string**  
**its loop.**




**in such a way that six objects will be in**

**(1)**



**B. Count and Circle (O) to the correct number given below.**

**(1)**



5	6	7	8
---	---	---	---

**C. Complete the tables.**

**(1)**

1.  $3 \times 4 =$  \_\_\_\_\_

2.  $5 \times 3 =$  \_\_\_\_\_

\*\*\*\*\*