

Fr. Agnel School

Waliv, Vasai (E)

1st Unit Test Exam

Std.: 6th

Sub: Maths

Total Marks: 20

Q.I. Tick mark the correct option from the following.

(8)

1. Tick the positive number to negative number.

+26

a. 26

b. -26

c. +26

2. Tick the correct option.

+9 ____ +9

a. >

b. =

c. <

3. Add: $(8+6) =$ ____

a. 14

b. 41

c. 12

4. Tick the type of angle



a. Complete Angle

b. Zero Angle

c. Straight Angle

5. Tick the correct option.

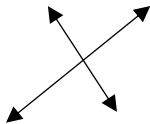


a. Ray

b. Plane

c. Line


6.



a. Parallel lines

b. Intersecting lines

7.

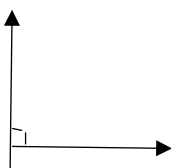


a. Ray

b. Line Segment

c. Line

8.



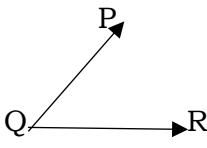
a. Right Angle

b. Obtuse Angle

c. Acute Angle

Q.II.A. Complete the following table.

(3)

Angle	
Name of the Angle	
Vertex of the Angle	
Arms of the Angle	

B. Write the numbers in the following examples using the proper signs. (1)

1. A submarine is at a depth of 152 metres below sea level

(3)

Q.III.A. Add the following.

1. $-5+(-2)$

2. $(+3) + (+3)$

3. $9 + (-3)$

B. Put the proper symbols in the box. (3)

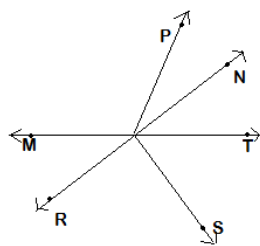
('>', '<', '=')

1. -10 -10

2. -12 5

3. 7 4

Q.IV. Look at the figure and name the following. (2)



1. Rays.

→

2. Collinear Points.

→
