

# Fr. Agnel School

Waliv, Vasai (E)

1<sup>st</sup> Unit Test Exam

Std. : 4<sup>th</sup>

Sub : Maths

Total Marks : 20

---

**Q.I. Tick mark the correct option from the following.**

**(8)**

1. Tick the number from their expanded form:

$$3000+500+60+4= \underline{\hspace{2cm}}$$

- a. 3564
- b. 3654
- c. 3456

2. Tick the Place value of the underlined digit.

1 9 2 6

- a. 90
- b. 900
- c. 9

3. Tick the correct option in its expanded form.

$$7342= \underline{\hspace{10cm}}$$

- a. 7000+3+4+2
- b. 7+3+4+2
- c. 7000+300+40+2

4. Tick mark the type of angle.



- a. Right Angle
- b. Obtuse Angle
- c. Acute Angle

5. Tick mark the correct number and tick the correct answer in figures.

Nine thousand nine hundred and ninety-nine.

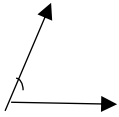
- a. 9090
- b. 999
- c. 9999

6. Read the given number and tick the answer in words.

5045

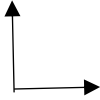
- a. Five thousand and forty-five
- b. Fifty thousand and five
- c. Fifty thousand

7. Tick mark the type of angle.



- a. Obtuse Angle
- b. Right Angle
- c. Acute Angle

8. Tick mark the type of angle.



- a. Right Angle
- b. Obtuse Angle
- c. Acute Angle

**Q.II. Read the question given in the brackets and fill the empty boxes. (3)**

1. (Write the next two numbers)

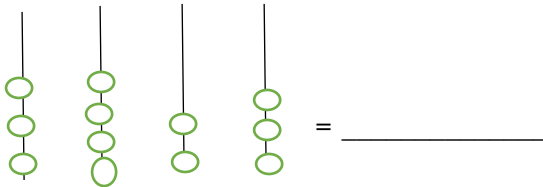
392, \_\_\_\_\_, \_\_\_\_\_

2. (Write the smaller and bigger number.)

999,9999

Smaller- \_\_\_\_\_ Bigger- \_\_\_\_\_

3. (Look at the symbols and write the number)



**Q.III.A. Add the following. (2)**

1.

Th	H	T	U
6	7	8	5
+2	3	1	2

2.

Th	H	T	U
1	8	8	8
+4	2	1	3

**B. Add Horizontally.**

**(2)**

1.  $2711 + 1233$

2.  $562 + 121$

**Q.IV. Look at the figure and answer the following.**

**(2)**



1. Name the sides.



→ \_\_\_\_\_

2. Name the vertices.

→ \_\_\_\_\_

**Q.V. Observe the figure and complete the following.**

**(3)**

Figure		
Name of the figure	_____	_____
Number of sides	_____	_____

\*\*\*\*\*